


# Weather Tools

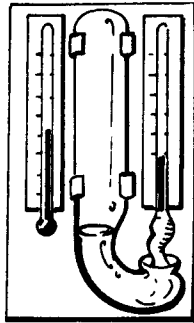
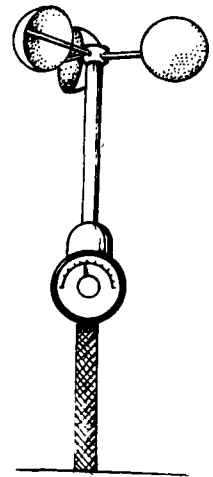
Name \_\_\_\_\_

Meteorologists use many instruments to gather their data.  
Label each of these weather instruments.

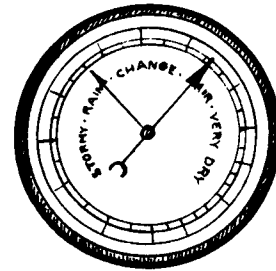


\_\_\_\_\_

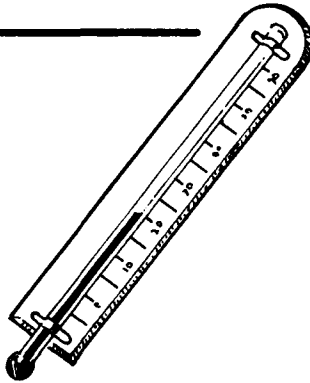
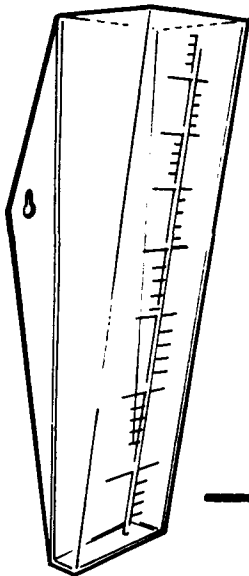
\_\_\_\_\_



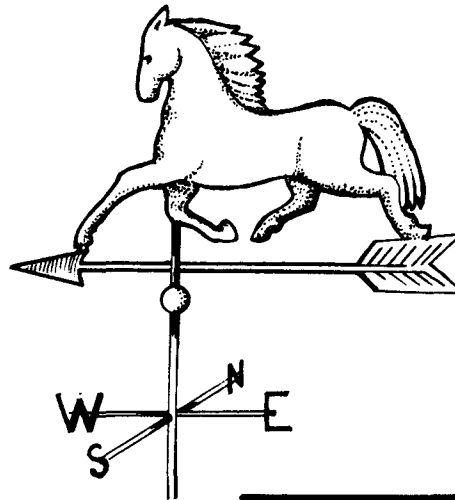
\_\_\_\_\_



\_\_\_\_\_



\_\_\_\_\_



\_\_\_\_\_

## WORD BANK

clouds-nephoscope  
relative humidity-hygrometer  
nephoscope

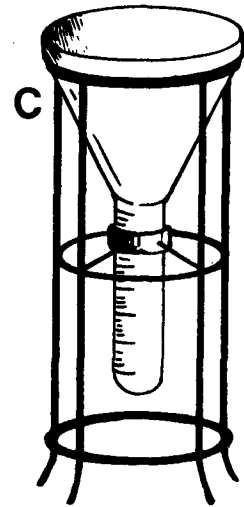

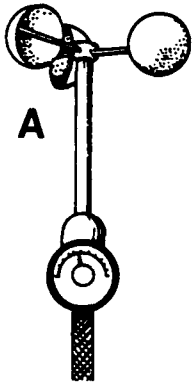
thermometer  
rain gauge  
anemometer

barometer  
vane


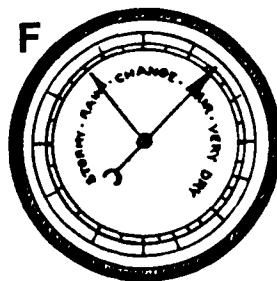
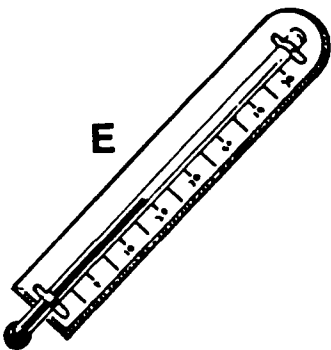
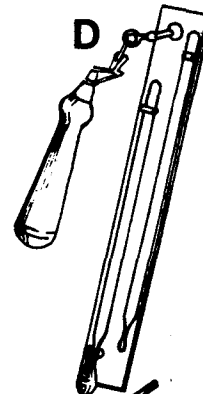
# Weather Instruments

Name \_\_\_\_\_

Meteorologists use a variety of instruments to gather data. Many of these instruments are pictured below. Identify each instrument and tell what it measures.



	Weather Instrument	It Measures . . .
A		
B		
C		
D		
E		
F		
G		



## WORD BANK

temperature  
 anemometer  
 weather vane  
 rain gauge  
 wind direction

relative humidity  
 thermometer  
 hygrometer  
 precipitation  
 cloud altitude and direction

atmospheric (air) pressure  
 barometer  
 nephoscope  
 wind speed