

**Pulling It Together**




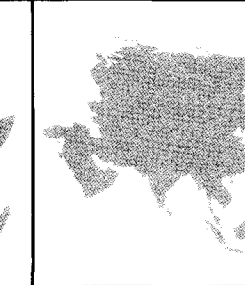
## European Trade Empires



Use pages 92–93 of *The Nystrom Atlas of World History*, your Activity Map, and Activity Sheets 46a–46c to complete the chart below.

Atlas  
Activity Map  
Map Marker

- At the top of each column, write the name of the continent shown.
- Check off whether most colonies on that continent were land claims or trade colonies.
- List the European countries that established colonies on that continent.
- Draw icons for two sources of trade from the continent.

<b>Continent</b>				
<b>Type of Colony</b>	<input type="checkbox"/> Land Claims <input type="checkbox"/> Trade Colonies	<input type="checkbox"/> Land Claims <input type="checkbox"/> Trade Colonies	<input type="checkbox"/> Land Claims <input type="checkbox"/> Trade Colonies	<input type="checkbox"/> Land Claims <input type="checkbox"/> Trade Colonies
<b>Colonizers</b>				
<b>Items Traded</b>				

★ Goods we use each day are often made in other countries. Look at the labels on three items you are wearing. How did European trade empires of the past influence trade today? Write a paragraph explaining your answer.